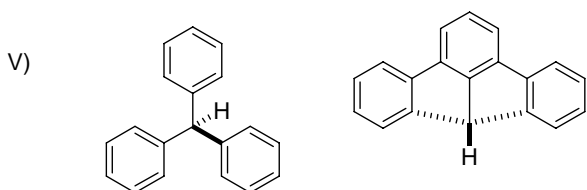
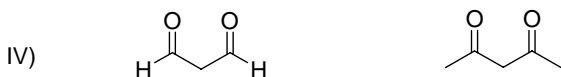
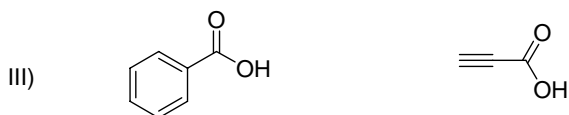
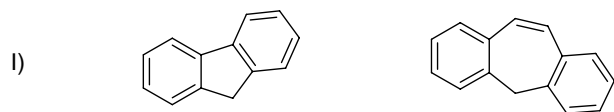
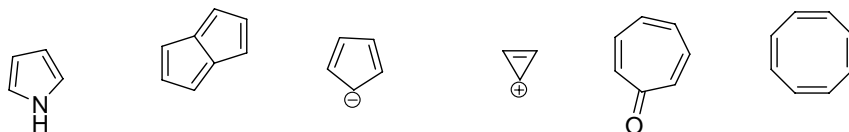


Group Meeting Problems
March 7, 2007

1) For each pair of molecules, Which molecule is more acidic?



2) Indicate, which molecules are aromatic?



3) Fill in the boxes with the appropriate structures to obtain an acetyl cholinesterase inhibitor, a promising pro-drug to treat Alzheimer Disease.

