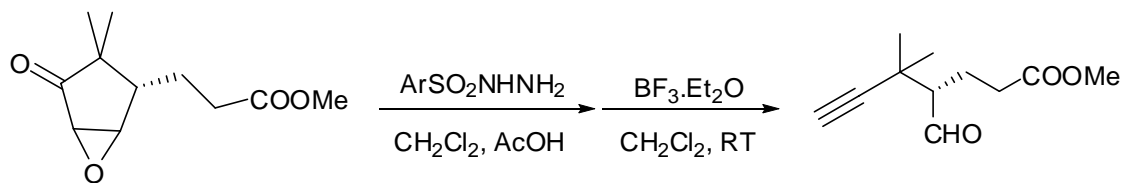
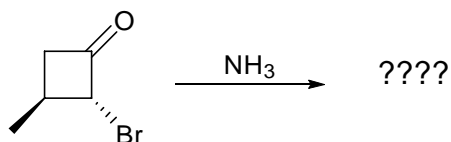


Group Meeting Problems November 22, 2006.

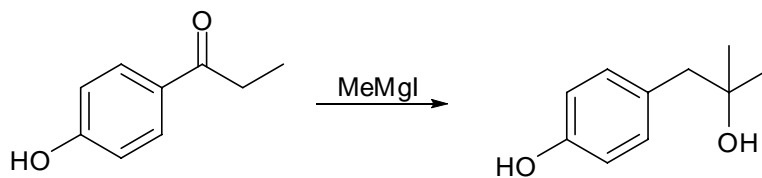
Q.1: Propose a possible mechanism of the following reaction?



Q.2: Predict the product in the following reaction?



Q. 3: Propose a possible mechanism for the following reaction?



Q. 4: Propose a possible mechanism for the following reaction?

